

Name \_\_\_\_\_ Date \_\_\_\_\_ Period \_\_\_\_\_

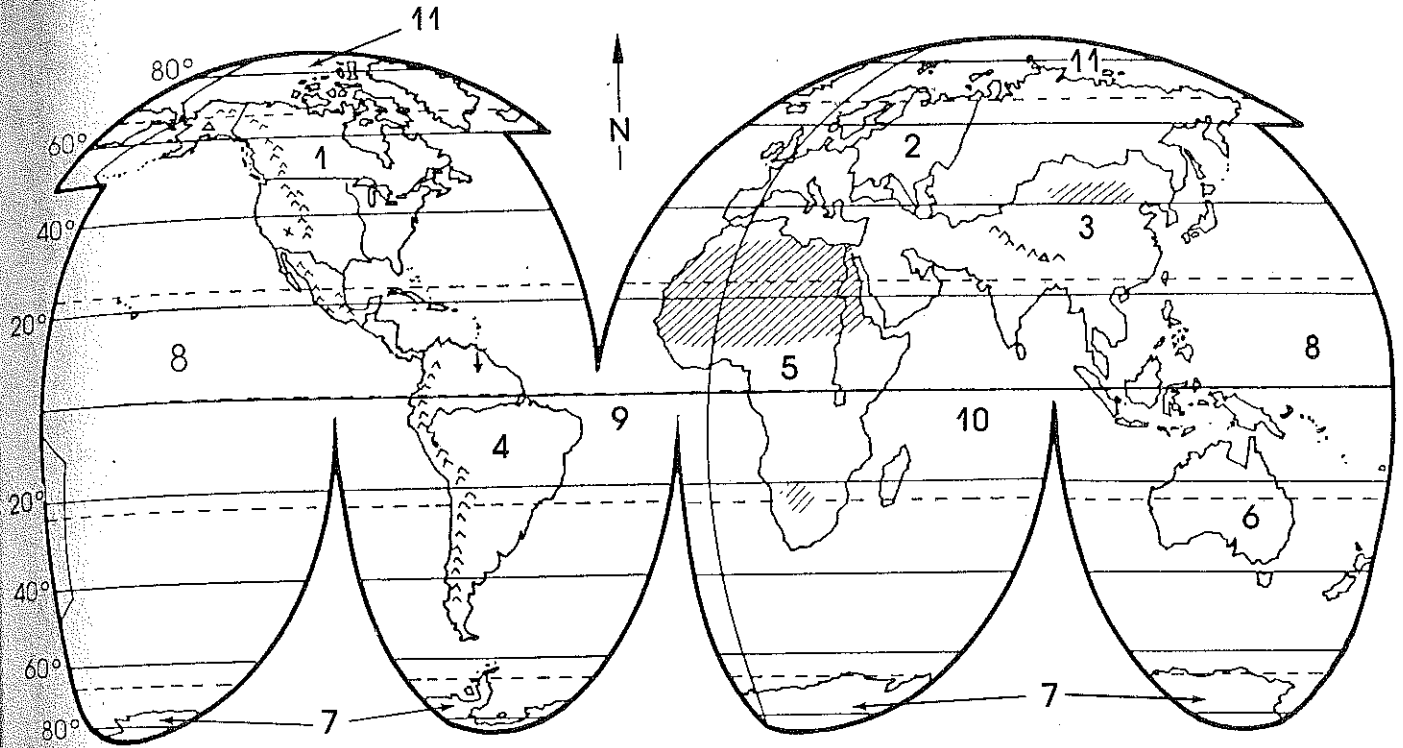
## STUDENT CODE OF CONDUCT SCAVENGER HUNT

Please locate the answers to the following questions using your *Code of Conduct & Discipline Handbook*. Record the page number of where you found your response.

1. A "chronic disciplinary problem student" is defined by law as \_\_\_\_\_ which \_\_\_\_\_ with the learning process of students around him and which are likely to recur.
2. What will the principal or designee afford a student if he/she is suspended?  
\_\_\_\_\_
3. True or False. Students under suspension or expulsion shall participate in or attend school activities. \_\_\_\_\_
4. \_\_\_\_\_ and all school and classroom storage areas all considered school property.
5. Who is expected to work together to improve and enhance student behavior and academic performance? \_\_\_\_\_
6. Once it has been determined that a rule(s) was violated the administrator will follow a \_\_\_\_\_.
7. Georgia law requires that after any student accrues \_\_\_\_\_ days of unexcused absences in a given school year, the parent/guardian in charge of the said child is in violation of the truancy law.
8. When a parent/guardian violates the attendance code section and is found guilty of this misdemeanor, what are 3 possible consequences?  
\_\_\_\_\_
9. True/False: School bus stops are considered school property. \_\_\_\_\_
10. Long-term suspension means suspension of a student for more than \_\_\_\_\_ days, but not beyond the current school \_\_\_\_\_ or \_\_\_\_\_.

11. True/False: If a student urges, encourages, or counsels other students to violate school rules he/she is considered in violation of the disciplinary rule of "Disruption and Interference with School." \_\_\_\_\_
12. Is writing threats about beating up a fellow student on Facebook an example of bullying in school? \_\_\_\_\_
13. What are some examples of over-the-counter medications? \_\_\_\_\_
- 
14. Which of the following is NOT considered a Category I Weapon?  
15. Loaded firearm    paint pellet gun    bomb    grenade    poison gas
16. True/False: Sexual jokes about an individual's physical characteristics are not a form of sexual harassment. \_\_\_\_\_
17. What happens if a student (grades 6-12) commits the offense of bullying for the third time in a school year? \_\_\_\_\_
- 
18. What does the Code of Conduct give as examples of inappropriate dress and grooming? \_\_\_\_\_
- 
19. Participating in a raffle or bingo game sponsored by a school-related group is an example of gambling. True or False? \_\_\_\_\_
20. Engaging in amorous kissing or similar displays of affection is considered sexual misconduct in school. True/False? \_\_\_\_\_
21. How long does one have to appeal the hearing decision to the board? What are the details regarding such an appeal? \_\_\_\_\_
-

# World Locations and Facts



^^	Mountain Range	~~~~	Rivers	X	Canyon
▲	Mountain Peak	▨	Desert	↓	Waterfall

Write the names of the continents and bodies of water on the map as indicated by the following numbers.

1. \_\_\_\_\_ 4. \_\_\_\_\_ 7. \_\_\_\_\_ 10. \_\_\_\_\_  
 2. \_\_\_\_\_ 5. \_\_\_\_\_ 8. \_\_\_\_\_ 11. \_\_\_\_\_  
 3. \_\_\_\_\_ 6. \_\_\_\_\_ 9. \_\_\_\_\_

Color the Equator green, Tropic of Cancer yellow, Tropic of Capricorn orange, Arctic Circle blue, Antarctic Circle red, Prime Meridian purple and the International Date Line brown.

Mark a blue X on the world's longest river and a green X on the world's highest mountain peak.

Circle the world's largest lake green, the world's largest island red, the world's highest mountain range black, the world's largest desert yellow and the world's largest peninsula orange.

Color the world's largest country brown.

What is the name of the world's largest canyon and where is it located?

\_\_\_\_\_ Highest peak and where is it located?

Highest waterfall and where is it located? \_\_\_\_\_

Label all the rivers, lakes, peaks and deserts shown on the map.

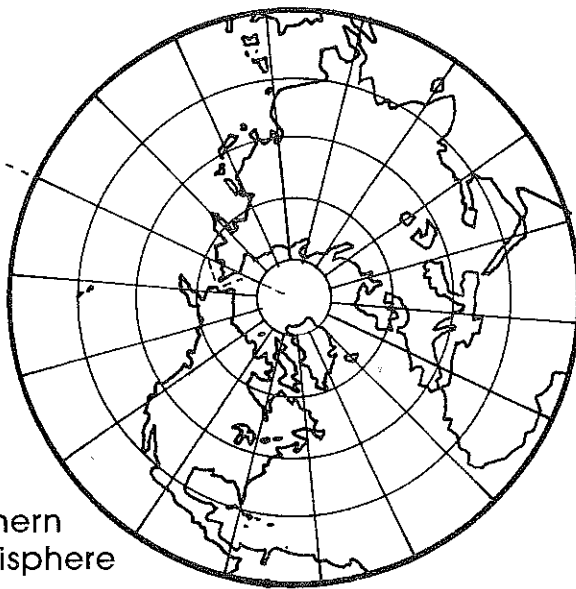
# Four Hemispheres



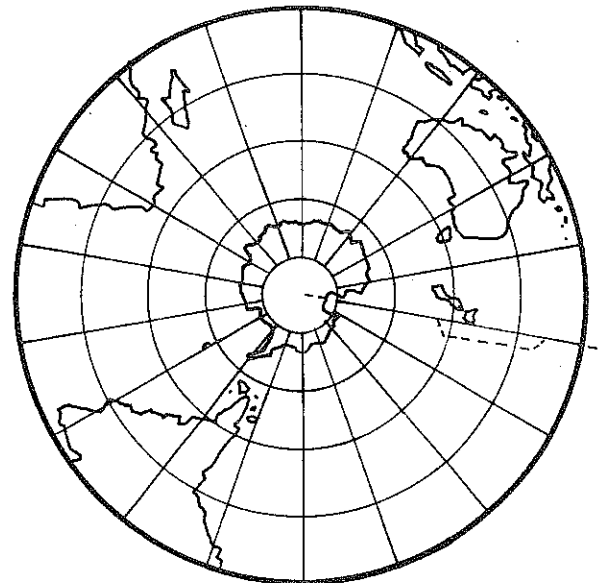
1. Western Hemisphere



2. Eastern Hemisphere



3. Northern Hemisphere



4. Southern Hemisphere

Match the numbers on these hemispheric maps with the names below. Most names will have more than one number.

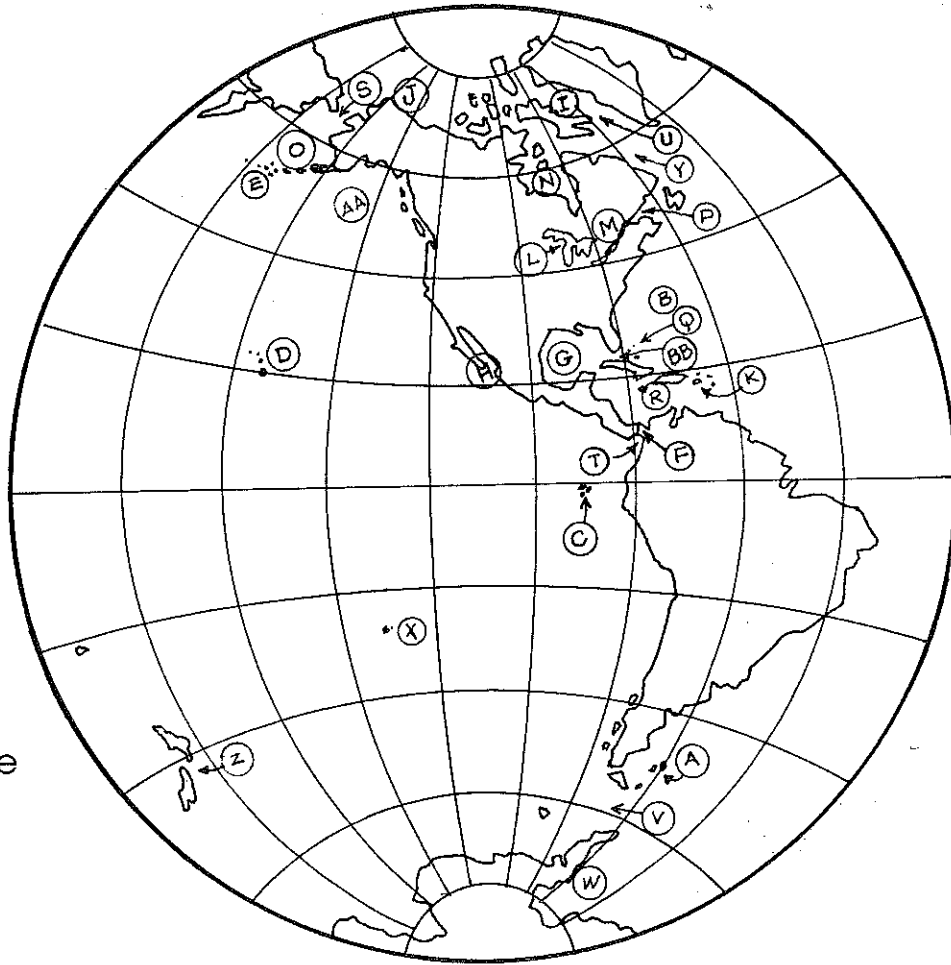
- |                               |                        |                        |                  |
|-------------------------------|------------------------|------------------------|------------------|
| _____ North America           | _____ South America    | _____ Australia        |                  |
| _____ Asia                    | _____ Africa           | _____ Europe           | _____ Antarctica |
| _____ Atlantic Ocean          | _____ Pacific Ocean    | _____ Indian Ocean     |                  |
| _____ Arctic Ocean            | _____ Antarctic Ocean  | _____ Equator          |                  |
| _____ Arctic Circle           | _____ North Pole       | _____ Tropic of Cancer |                  |
| _____ Tropic of Capricorn     | _____ Antarctic Circle | _____ Prime Meridian   |                  |
| _____ International Date Line |                        |                        |                  |

On another piece of paper define: Continent, Eurasia, Hemisphere, Prime Meridian, International Date Line.

# The Western Hemisphere

The list below contains the names of geographic places in the Western Hemisphere. Match the names with their letter locations on the map.

- \_\_\_ Bering Sea
- \_\_\_ Beaufort Sea
- \_\_\_ Labrador Sea
- \_\_\_ Caribbean Sea
- \_\_\_ Gulf of Mexico
- \_\_\_ Bering Strait
- \_\_\_ Bermuda
- \_\_\_ Drake Passage
- \_\_\_ Gulf of Panama
- \_\_\_ Gulf of Alaska
- \_\_\_ Aleutian Islands
- \_\_\_ Hawaiian Islands
- \_\_\_ West Indies



- \_\_\_ Gulf of St. Lawrence
- \_\_\_ Falkland Islands
- \_\_\_ Gulf of California
- \_\_\_ Weddell Sea
- \_\_\_ Great Lakes
- \_\_\_ Straits of Florida
- \_\_\_ Hudson Bay
- \_\_\_ Baffin Bay
- \_\_\_ Davis Strait
- \_\_\_ Panama Canal
- \_\_\_ Galapagos Islands
- \_\_\_ Bahamas
- \_\_\_ Easter Island
- \_\_\_ St. Lawrence Seaway
- \_\_\_ New Zealand

## Island Hopping Trivia Match

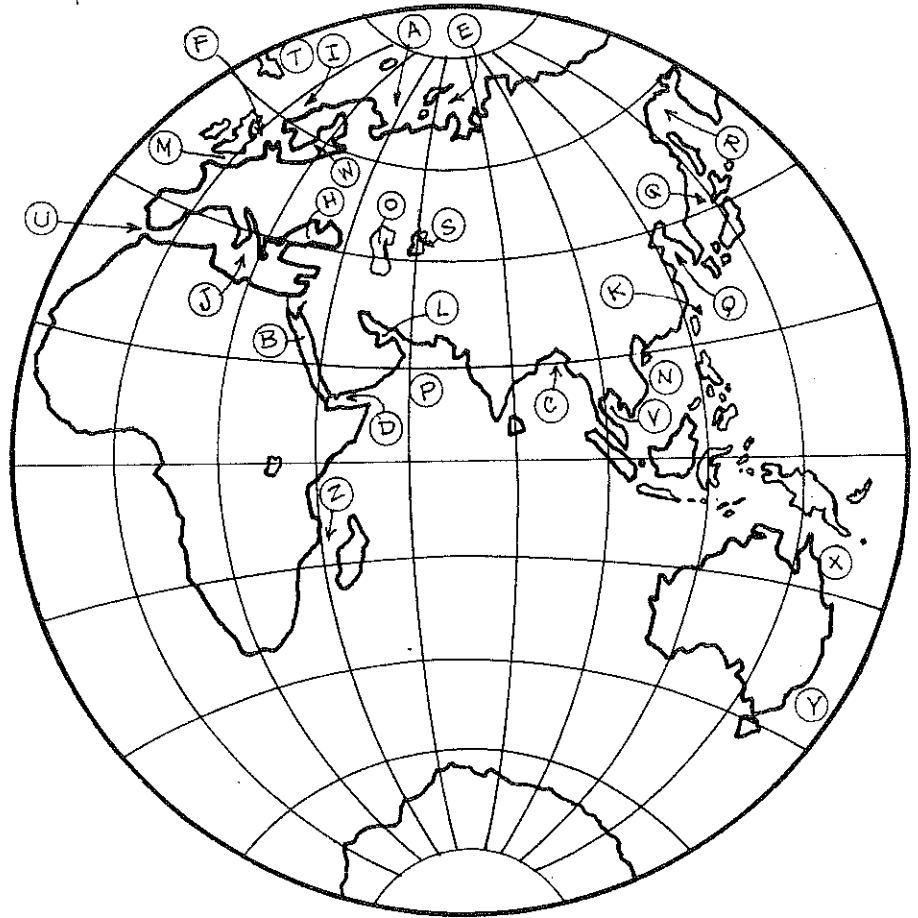
- |                      |                              |
|----------------------|------------------------------|
| ___ Galapagos Island | 1. Eric the Red              |
| ___ Kodiak Island    | 2. June 1942                 |
| ___ Falkland Islands | 3. Giant Tortoise            |
| ___ Greenland        | 4. U.S. Territory            |
| ___ Midway Island    | 5. Brown Bear                |
| ___ Puerto Rico      | 6. British/Argentine War     |
| ___ Easter Island    | 7. St. George Medical School |
| ___ Grenada          | 8. Megaliths                 |
| ___ Pitcairn Island  | 9. United Kingdom            |

# Georgia

## The Eastern Hemisphere

The list below contains the names of geographic places in the Eastern Hemisphere. Match the names with their letter locations on the map

- \_\_\_ Greenland Sea
- \_\_\_ Norwegian Sea
- \_\_\_ Mediterranean Sea
- \_\_\_ Arabian Sea
- \_\_\_ South China Sea
- \_\_\_ East China Sea
- \_\_\_ Sea of Okhotsk
- \_\_\_ Caspian Sea
- \_\_\_ Black Sea
- \_\_\_ Red Sea
- \_\_\_ Aral Sea
- \_\_\_ Baltic Sea
- \_\_\_ North Sea
- \_\_\_ Tasman Sea
- \_\_\_ Persian Gulf
- \_\_\_ Bay of Bengal
- \_\_\_ Gulf of Thailand
- \_\_\_ English Channel
- \_\_\_ Strait of Gibraltar
- \_\_\_ Barents Sea
- \_\_\_ Gulf of Aden
- \_\_\_ Yellow Sea
- \_\_\_ Sea of Japan
- \_\_\_ Mozambique Channel
- \_\_\_ Coral Sea
- \_\_\_ Kara Sea



**BRAIN TEASER:** Cross out the one term in each group that does not fit and tell why.

1. White, Red, Black, Coral, Blue \_\_\_\_\_  
\_\_\_\_\_
2. Strait, Sound, Channel, Canal, Bay \_\_\_\_\_  
\_\_\_\_\_
3. Tahiti, Tasmania, Guam, Madagascar, Auckland  
\_\_\_\_\_
4. Baltic, Coral, Aral, Arabian, Kara \_\_\_\_\_  
\_\_\_\_\_

**SPECIAL MARKINGS:** Make an X on the Suez Canal. Circle Lake Victoria. Draw a triangle around Madagascar.

Name \_\_\_\_\_ Period \_\_\_\_\_  
**Daily Geography Quiz Week 1**

1. What is the name of the imaginary line that divides Earth into the Northern and Southern Hemispheres?

\_\_\_\_\_

2. Which of the following is not a state: Rhode Island, Louisiana, Sacramento, Montana?

\_\_\_\_\_

3. What part of a map contains information on what the map's symbols mean?

\_\_\_\_\_

4. Is the Tropic of Cancer north or south of the equator?

\_\_\_\_\_

5. What is the name given to a point of land extending into a body of water?

\_\_\_\_\_

Bonus: Name the four oceans of the Earth according to size, largest to smallest.

\_\_\_\_\_

\_\_\_\_\_

\_\_\_\_\_

Word Bank: Equator, Sacramento, Key or Legend, North, Pacific, Atlantic, India, Arctic, National Capital, Cape, Eastern, Western, Southern, Northern,

Name \_\_\_\_\_ Period \_\_\_\_\_

**Daily Geography Quiz Week 2**

1. What is the northernmost point in the world called?

\_\_\_\_\_

2. Which of the following is not a city: Seattle, Miami, Kentucky, Chicago?

\_\_\_\_\_

3. Name an example of an area of land that is smaller than a continent and is completely surrounded by water. What term is used to describe this type of land?

\_\_\_\_\_

4. Is the Arctic Circle north or south of the equator?

\_\_\_\_\_

5. What are the two continents in the world with the largest land areas?

\_\_\_\_\_

Bonus: What is the definition of a peninsula? Name an example of a peninsula.

\_\_\_\_\_

\_\_\_\_\_

\_\_\_\_\_

\_\_\_\_\_

Word Bank: Africa, Asia, Antarctica, Australia, Europe, North and South America, Gulf of Mexico, Kentucky, Island, North Pole, North, and Asia and Africa



# Five-Tab Notebook Foldables - Vertical Template

Title: Five themes of geography

<p>©2008 DMA, www.dinah.com</p>	<p>Location</p>
<p>Movement</p>	
<p>Region</p>	
<p>Human Environment Interaction</p>	
<p>Place</p>	

Title: Unit 1 Themes of geography Draw an example of each theme

<p>©2008 DMA, www.dinah.com</p>	